

Fadhbanna

i

bhfoirní focal



Gaelscoil Uí Néill


Focail Mata

Focail Suimithe

suimigh	+	sin	agus
déanann		níos mó ná	ar fad
		cuir... le chéile...	móide


dealaigh	-	bain ar shiúl	
		níos lú ná	fágtha
imithe		lúide	fágann

Liosta Focal



bád

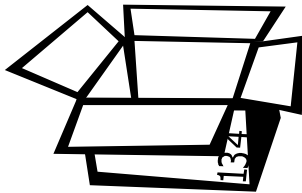
bóin
Dé



béar



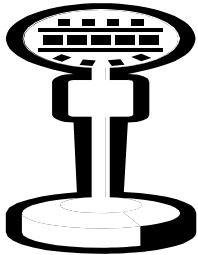
bonnóg




bosca



bus




bus
stop



carr

cat




ceapaire



coinín


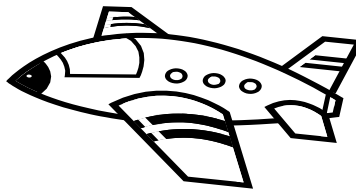

damhán
alla



dineasar

eitleán


féileacán




iasc



liathróid



leabhar




líreacán


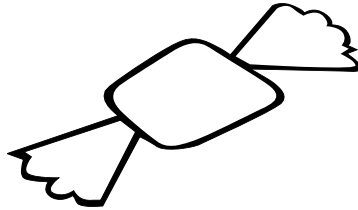
luascán



mála



meacan



dearg



milseán

moncaí

nathair

páistí


peann




roicéad



taibhse




teach




úll


Déan Suim i bhFoirm Focal



1



2



3

Cuir in ord.

1

2

3


Gearr agus greamaigh.

Cá mhéad úll  atá ag Liam  agus Nóra  ar fad?

Bhí 3 úll  ag Liam  .


Bhí 4 úll  ag Nóra  .

Déan Suim i bhFoirm Focal




1

Cuir in ord.



2



3

1

2

3


Gearr agus greamaigh.

D'ith an cat  2 iasc  .

Bhí 3 iasc  ag Liam  .


Cá mhéad iasc  atá fágtha aige?

Déan Suim i bhFoirm Focal




1

Cuir in ord.



2



3


1

2

3


Gearr agus greamaigh.

Cá mhéad bonnóg  atá fágtha?


Bhí 6 bhonnóg  ann.

D'ith Nóra  2 bhonnóg  .


Déan Suim i bhFoirm Focal



1



2



3

Cuir in ord.

1

2

3


Gearr agus greamaigh.

Cheannaigh sé 1 eile.


Cá mhéad iasc  ar fad atá aige anois?

Tá 3 iasc  ag Liam  ina thanc.


Déan Suim i bhFoirm Focal



1



2



3

Cuir in ord.

1

2

3


Gearr agus greamaigh.

Cá mhéad ar fad atá aici anois?

Thug Liam  6 dhineasár  eile di.

Bhí 2 dhineasár  ag Nóra .


Déan Suim i bhFoirm Focal



1



2



3

Cuir in ord.

1

2

3

Gearr agus greamaigh.

D'ith an coinín  4 mheacan dearg .

Cá mhéad meacan dearg atá fágtha?


Bhí 8 meacan dearg sa ghairdín.

Tarraing é

Gearr agus greamaigh.

Cá mhéad úll ar fad atá aige?

Tá 5 úll  ag Liam.

Thug Nóra 3 úll  eile dó.


Cuir in ord.

1

2


3

Tarraing pictiúir don áireamh seo.



5


+



+

3

=



=

Tarraing é

Gearr agus greamaigh.

Bhí 6 eitleán  ag an aerfort.

Cá mhéad eitleán  atá fágtha?

D'eitil 4 eitleán  ar shiúl.


Cuir in ord.

1

2


3

Tarraing pictiúir don áireamh seo.




6

-



4




=



=

Tarraing é




Gearr agus greamaigh.

Cá mhéad taibhse  atá fágtha?
agus eitlíonn 6 taibhse  ar shiúl.
Má tá 10 taibhse  sa teach

Cuir in ord.

1
2
3

Tarraing pictiúir don áireamh seo.

	-		=	
10	-	6	=	

Tarraing é

Gearr agus greamaigh.

Chaill sé 5 leabhar



Cá mhéad leabhar



atá fágtha aige aois?

Bhí 10 leabhar



ag Liam.


Cuir in ord.

1

2


3

Tarraing pictiúir don áireamh seo.




10

-



5

=



=

Tarraing é

Gearr agus greamaigh.

Chuir Liam 5 charr



sa bhosca.

Chuir Nóra 4 charr



sa bhosca.

Cá mhéad carr



ar fad atá sa bhosca?


Cuir in ord.

1


2

3


Tarraing pictiúir don áireamh seo.



+



=



5

+

4


=

Tarraing é

Gearr agus greamaigh.

Cá mhéad bóin Dé  ar fad sin?

Má tá 3 bhóin Dé  ag Liam agus

Tá 5 bhóin Dé  ag Nóra.


Cuir in ord.

1

2


3

Tarraing pictiúir don áireamh seo.



3


+



+

5


=



=

Tarraing é

Gearr agus greamaigh.

Cheannaigh sí 3 liathróid  eile.

Tá 4 liathróid  ag Nóra.

Cá mhéad liathróid  ar fad atá aici?


Cuir in ord.

1

2


3

Tarraing pictiúir don áireamh seo.



4


+



+

3

=



=

Tarraing é

Gearr agus greamaigh.

Eitlíonn 2 fhéileacán  ar shiúl.

Tá 8 bhféileacán  sa ghairdín.

Cá mhéad atá fágtha?


Cuir in ord.

1


2

3


Tarraing pictiúir don áireamh seo.



+



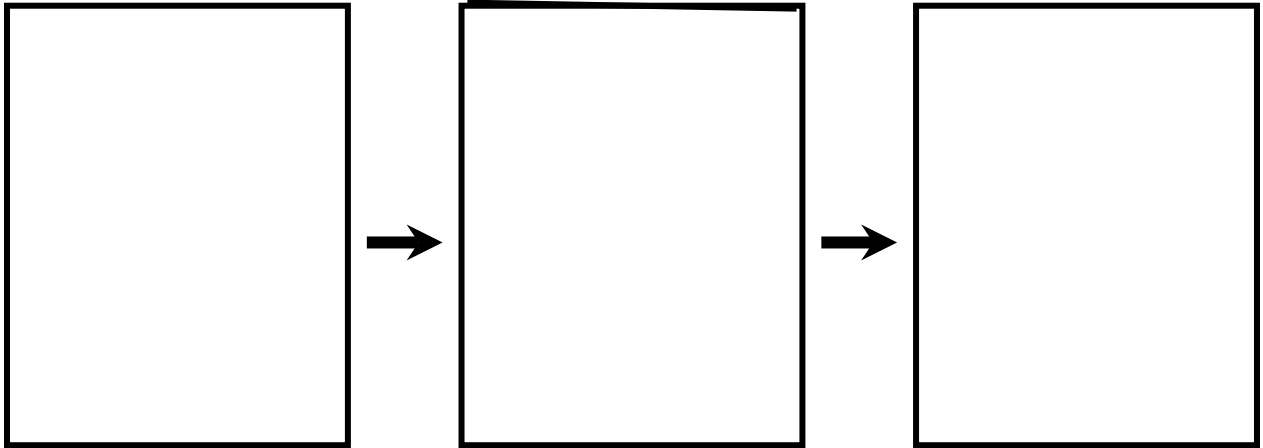
=



+

=

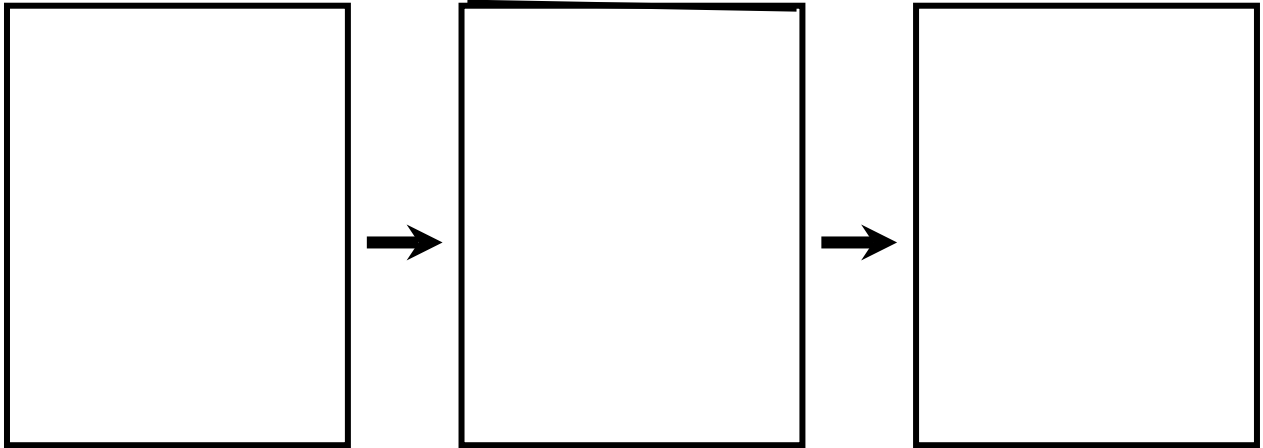
Gearr agus Greamaigh



Cad é an fhadhb?

Banc Focal			
dhá cheann	ocht	eitleán	ar shiúl
ag an aerfort.	Cá mhéad	Bhí	D'eitil
fágtha?	eitleán	atá	


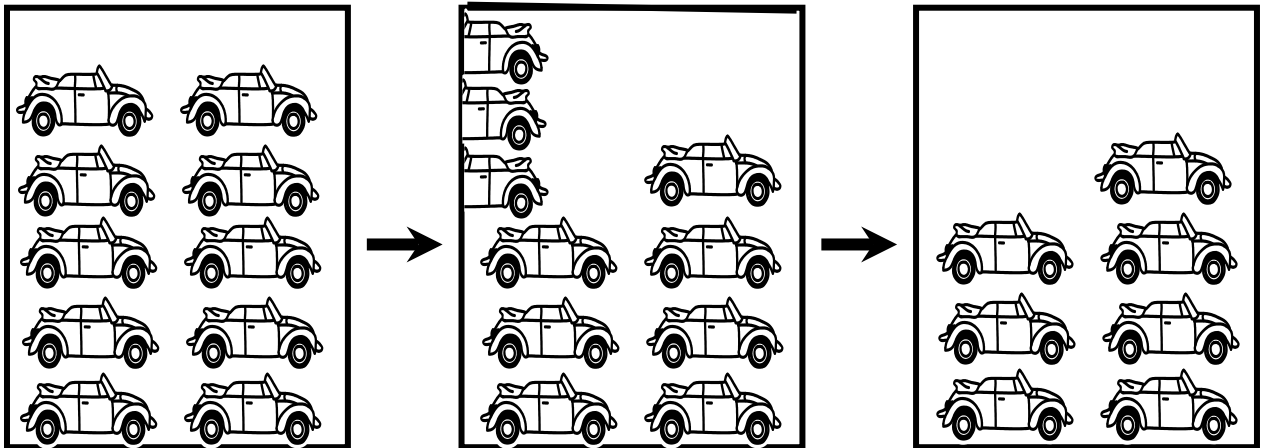
Gearr agus Greamaigh





Cad é an fhadhb?


Banc Focal			
dhá	Tháinig	eitleán	sa spéir.
eile.	Cá mhéad	Bhí	ceithre cinn
ar fad	eitleáin	atá ann	anois?

Gearr agus Greamaigh




Banc Focal			
deich	Cá mhéad	trí cinn	atá
carranna 	ann.	fágtha?	Bhí
ar shiúl.	Thiomáin	carr 	





Balla Focal



Sa Siopa



Bain úsáid as na focail seo chun fadhbanna i bhfoirm focal a dhéanamh.

Cheannaigh mé	milseáin 	agus				
líreacáin 	Ansin cheannaigh mé					
milseáin 	líreacáin 	Cá mhéad				
a cheannaigh mé	ar fad	san iomlán				
Cá mhéad atá agam anois?		sa siopa				
0	1	2	3	4	5	6
7	8	9	10	.	.	?

B'fhéidir go mbeadh ort ceannlitir a chur isteach.






Balla Focal



Sa Pháirc



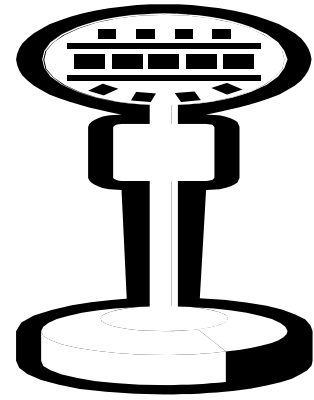
Bain úsáid as na focail seo chun fadhbanna i bhfoirm focal a dhéanamh.

Bhí	ag imirt	peile 	páistí 			
ar na luascáin 	agus	ansin	téann			
tagann	páistí 	abhaile	eile			
Cá mhéad	ar fad	atá	ann	anois		
fágtha	páistí 	sa pháirc				
0	1	2	3	4	5	6
7	8	9	10	.	.	?







B'fhéidir go mbeadh ort ceannlitir a chur isteach.

Balla Focal

Ag an bhus stop




Bain úsáid as na focail seo chun fadhbanna i bhfoirm focal a dhéanamh.

Bhí	páistí 	ar an	ag an			
bhus 	bhus stop 	Stop	an bus 			
agus	thuirling	den	chuaigh	ar		
páistí 	bhus 	Cá mhéad	atá			
fágtha	ar fad	atá ann	anois			
0	1	2	3	4	5	6
7	8	9	10	.	.	?

B'fhéidir go mbeadh ort ceannlitir a chur isteach.

Balla Focal

Ag an aerfort





Bain úsáid as na focail seo chun fadhbanna i bhfoirm focal a dhéanamh.

Bhí	eitleáin	ag an aerfort	D'eitil			
eitleáin	eile	isteach	ar shiúl			
Cá mhéad	eitleán	ar fad				
san iomlán	atá	fágtha	ann			
anois	san aerfort					
0	1	2	3	4	5	6
7	8	9	10	.	.	?


B'fhéidir go mbeadh ort ceannlitir a chur isteach.

Balla Focal

Ag an zú





Bain úsáid as na focail seo chun fadhbanna i bhfoirm focal a dhéanamh.

Bhí	moncaí 	nathair 	béar			
sa zú	agus	Cá mhéad	ainmhí			
ar fad	san iomlán	atá	sa zú			
D'éalaigh	ainmhí	ón zú	atá			
fágtha	moncaí 	nathair 	béar			
0	1	2	3	4	5	6
7	8	9	10	.	.	?

B'fhéidir go mbeadh ort ceannlitir a chur isteach.

Scríobh é



Banc Focal

d'ith

coinín


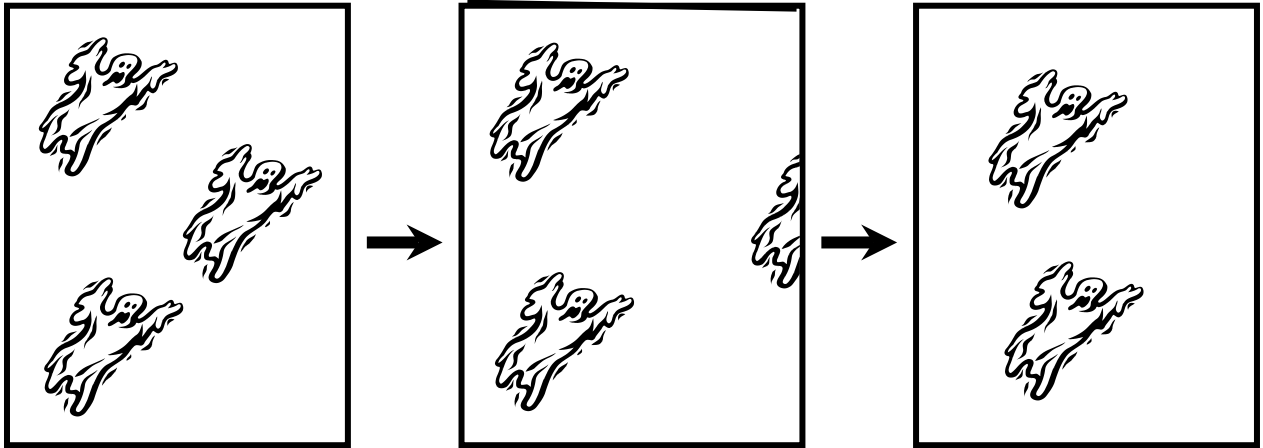


Cá mhéad

fágtha

meacan dearg

Scríobh é



Banc Focal

taibhsí 





teach  cá mhéad

d'eitil

fágtha

ar shiúl

Scríobh é



Banc Focal

milseáin



fágtha





Nóra



cá mhéad

d'ith

Scríobh é



Banc Focal

bonnóga



Liam





d'ith

fágtha

cá mhéad

Scríobh é



Banc Focal

dineasáir



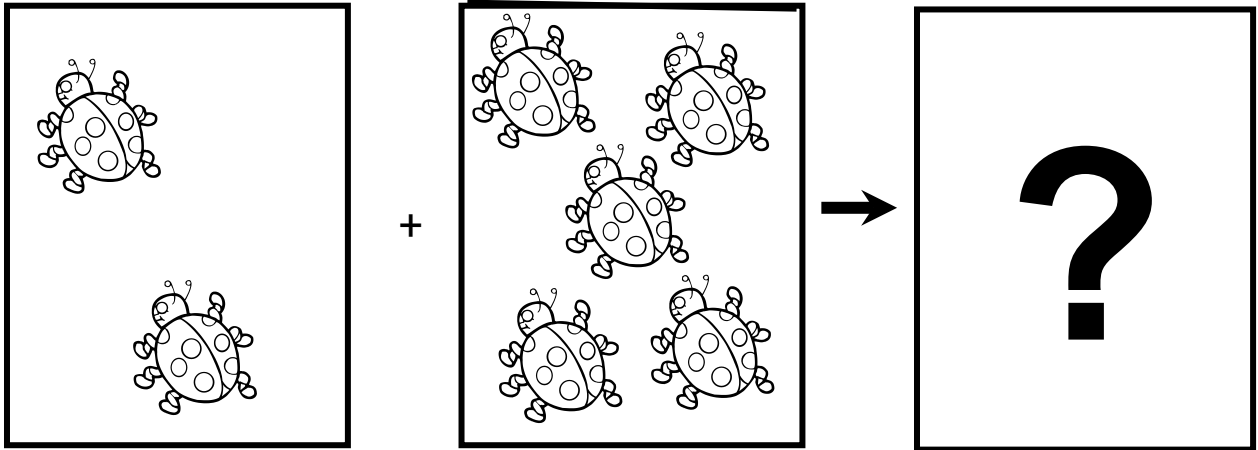
thug

anois

eile


cá mhéad

Scríobh é

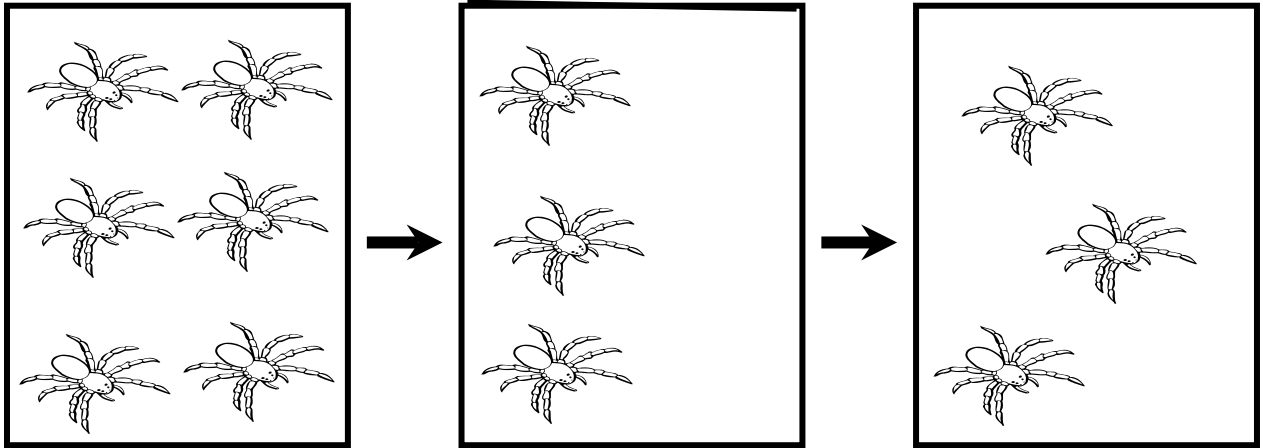


Cad é an fhadhb?

Banc Focal

bóin Dé  ar fad aici
fuair eile cá mhéad


Scríobh é



Cad é an fhadhb?

Banc Focal

damhán alla


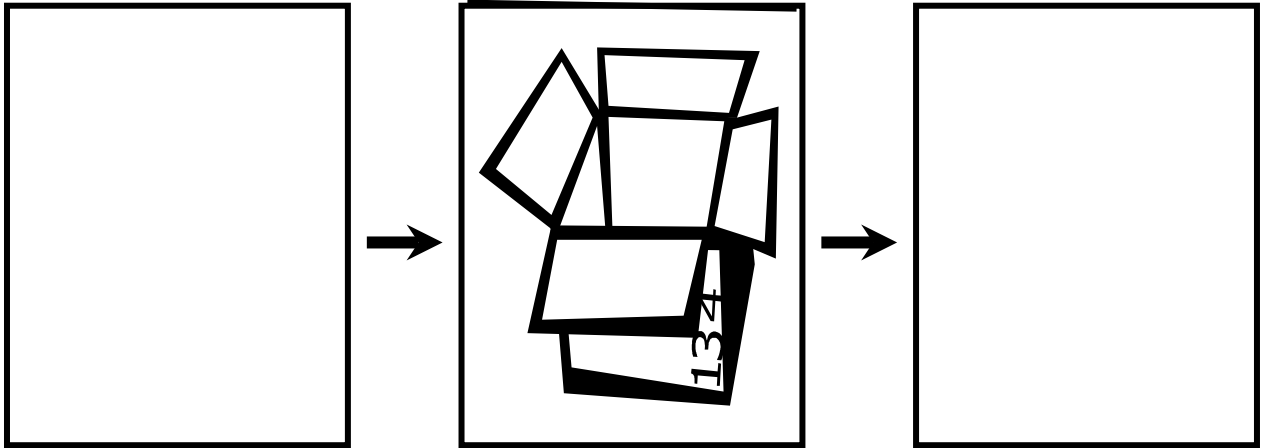


d'imigh

cá mhéad

fágtha

Scríobh é



Banc Focal

peann luaidhe


ghlac

amach

fágtha

bosca

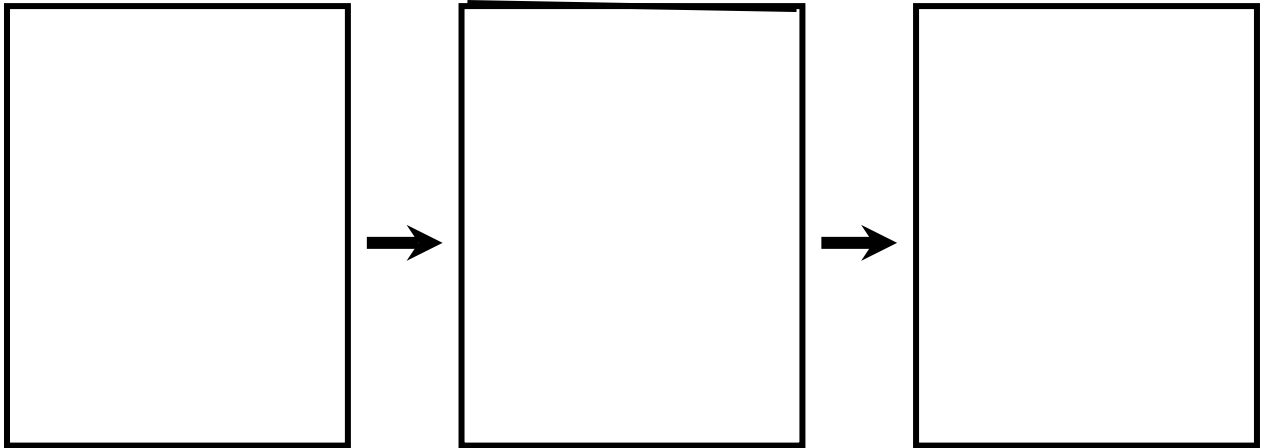
cá mhéad




Tarraing agus scríobh é

$$4 + 4 = 8$$

Tarraing pictiúir don suim seo.



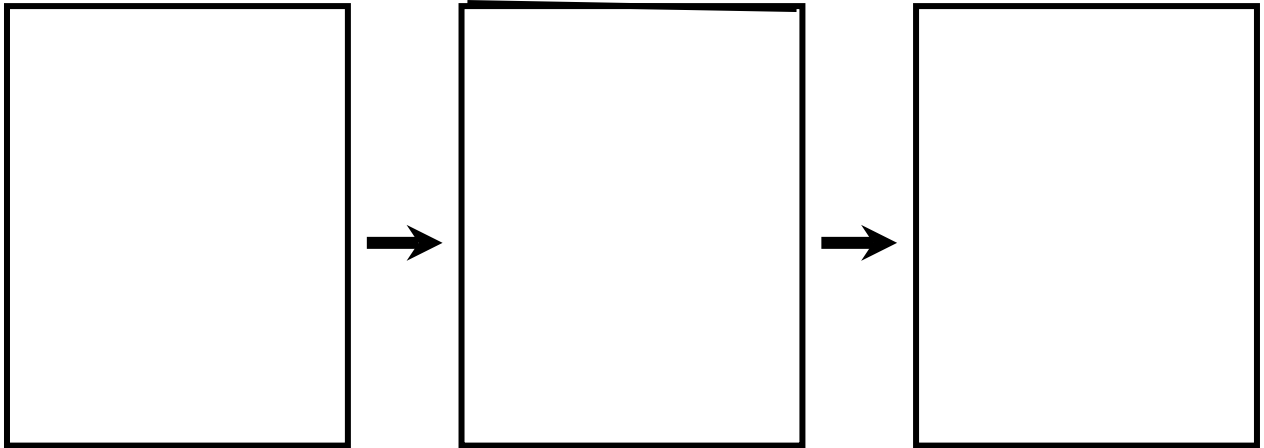
Scríobh suim i bhfoirm focal don tsuim seo.
Bain úsáid as an liosta focal agus na focail mata.




Tarraing agus scríobh é

$$9 + 1 = 10$$

Tarraing pictiúir don suim seo.



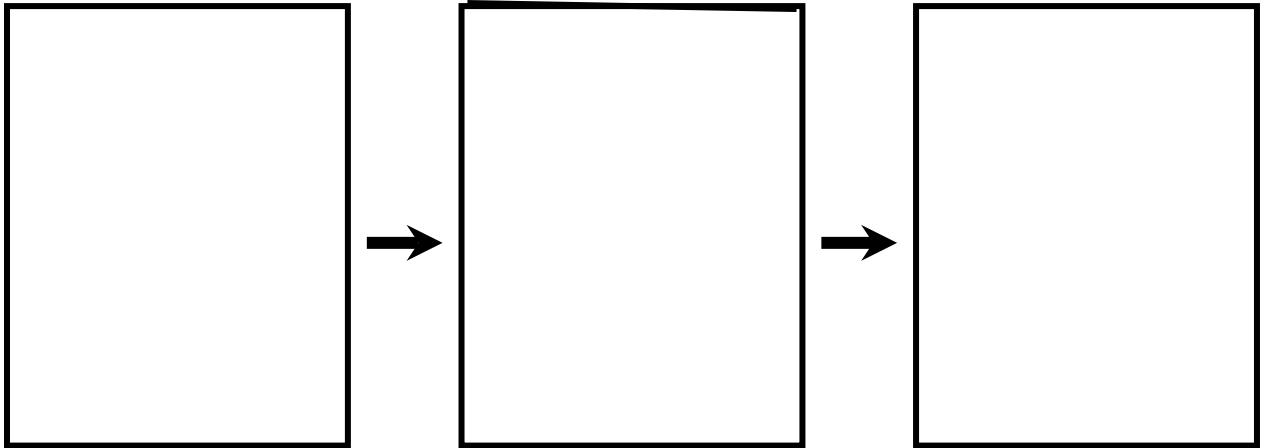
Scríobh suim i bhfoirm focal don tsuim seo.
Bain úsáid as an liosta focal agus na focail mata.




Tarraing agus scríobh é

$$2 + 1 = 3$$

Tarraing pictiúir don suim seo.



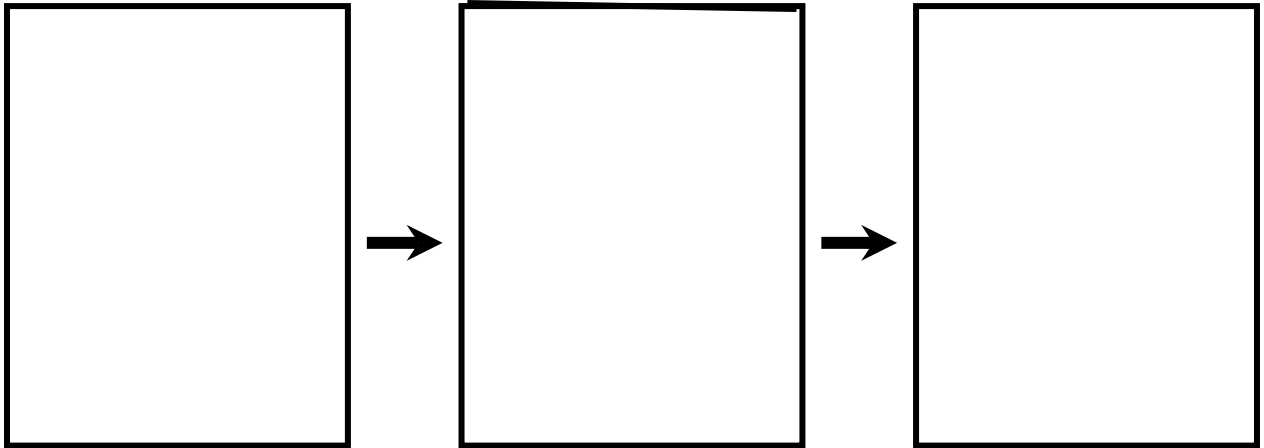
Scríobh suim i bhfoirm focal don tsuim seo.
Bain úsáid as an liosta focal agus na focail mata.




Tarraing agus scríobh é

$$5 - 3 = 2$$

Tarraing pictiúir don suim seo.



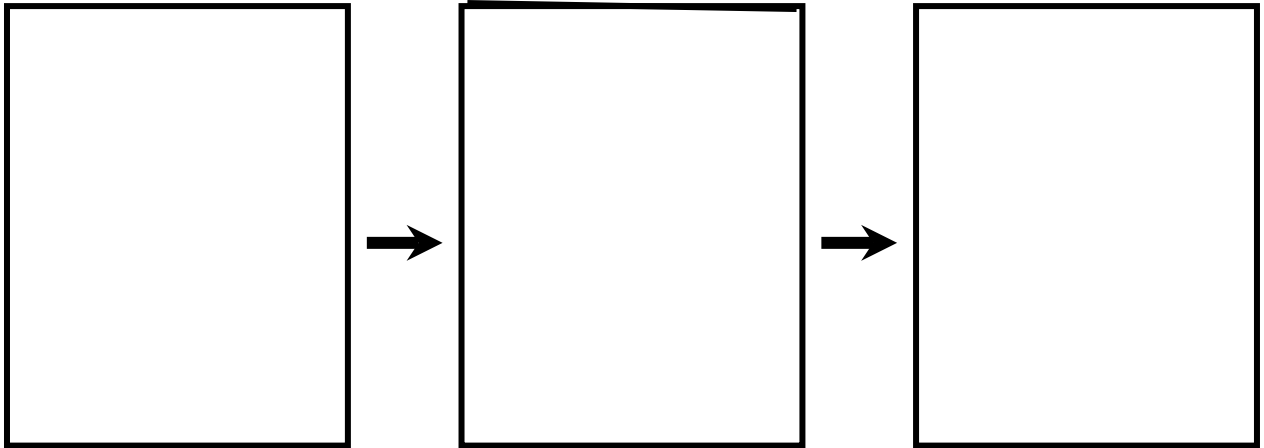
Scríobh suim i bhfoirm focal don tsuim seo.
Bain úsáid as an liosta focal agus na focail mata.




Tarraing agus scríobh é

$$8 - 4 = 4$$

Tarraing pictiúir don suim seo.



Scríobh suim i bhfoirm focal don tsuim seo.
Bain úsáid as an liosta focal agus na focail mata.



Bain triail as


Thug Liam 5 mhilseán  dom.

Thug Nóra 3 cinn eile dom.

Cá mhéad milseán  ar fad atá agam?

Baineann an fhadhb seo le:

• féileacáin 

• milseáin 

Is é a chaithfidh mé a fháil amach:

• an méid milseáin  a thug Nóra dom.

• an méid milseán  ar fad atá agam.

Focail Mata

+ _____

- _____


Meastachán
s'agamsa

- Níos mó ná 5
- Níos lú ná 5

An
tsuim.



Bain triail as

Cheannaigh mé 6 líreacán .

D'ith mé 4 líreacán .


Cá mhéad atá fágtha agam?


Baineann an fhadhb seo le:

• líreacáin 

• úlla 

Is é a chaithfidh mé a fháil amach:

• an méid líreacár 
atá fágtha.

• an méid líreacán 
atá fágtha sa
siopa.

Focail Mata

+ _____

- _____



Meastachán
s'agamsa

- Níos mó ná 5
- Níos lú ná 5

An
tsuim.



Bain triail as

Chonaic muid 10 roicéad .
D'imigh 6 roicéad  suas sa spéir.
Cá mhéad a bhí fágtha?


Baineann an fhadhb seo le:

• roicéid 

• réaltaí 

Is é a chaithfidh mé a fháil amach:

• an méid roicéad  ar fad.

• an méid roicéad  atá fágtha.

Focail Mata

+ _____

- _____

Meastachán
s'agamsa

- Níos mó ná 5
- Níos lú ná 5

An
tsuim.



Bain triail as


Chuir Liam 5 charr  sa bhosca.

Chuir Nóra 4 charr  sa bhosca.


Cá mhéad carr  ar fad atá sa bhosca?


Baineann an fhadhb seo le:

• báid 

• carranna 

Is é a chaithfidh mé a fháil amach:

• an méid carranna  ar fad atá ann.

• an méid carranna  níos lú atá ann.

Focail Mata

+ _____

- _____



Meastachán
s'agamsa

- Níos mó ná 5
- Níos lú ná 5

An
tsuim.





Bain triail as

9 damhán alla  agus 1 damhán alla 
Cá mhéad damhán alla ar fad?

Baineann an fhadhb seo le:

- damháin alla 
- féileacáin 

Is é a chaithfidh mé a fháil amach:

- an méid damhán alla níos lú atá ann. 
- An méid damhán alla ar fad atá ann. 

Focail Mata

+ _____

- _____

Meastachán
s'agamsa

- Níos mó ná 5
- Níos lú ná 5

An
tsuim.



Bain triail as

Bhí 3 pheann luaidhe  ar an tábla.

Chuir Liam 3 cinn acu ar shiúl.

Cá mhéad peann luaidhe  atá fágtha?

Baineann an fhadhb seo le:

- pinn luaidhe



- leabhair




Is é a chaithfidh mé a fháil amach:

- an méid peann luaidhe atá fágtha.



- an méid peann luaidhe ar fad atá ann.



Focail Mata

+ _____

- _____

Meastachán
s'agamsa


- Níos mó ná 5
- Níos lú ná 5

An
tsuim.



Bain triail as

Bhí 10 leabhar  ar an tábla.


Chuir Liam 3 leabhar  sa bhosca.

Cá mhéad atá fágtha ar an tábla?


Baineann an fhadhb seo le:

Is é a chaithfidh mé a fháil amach:

- leabhair 

- an méid leabhar atá fágtha. 

- pinn luaidhe 

- an méid leabhar san iomlán. 

Focail Mata

+ _____

- _____

Meastachán
s'agamsa

- Níos mó ná 5
- Níos lú ná 5


An
tsuim.



Bain triail as

Bhí 3 thaibhse  sa teach.

Tháinig 5 thaibhse  eile isteach.

Cá mhéad taibhse  san iomlán atá sa teach anois?

Baineann an fhadhb seo le:

- taibhsí



- dineasair



Is é a chaithfidh mé a fháil amach:

- an méid taibhsí ar fad.



- an méid taibhsí atá fágtha.



Focail Mata

+ _____

- _____

An tsuim.



Meastachán s'agamsa



- Níos mó ná 5
- Níos lú ná 5

Bain triail as

Tá 6 dhineasár  ag Liam.

Tá 2 níos lú ná sin ag Nóra.

Cá mhéad dineasár  atá ag Nóra?

Baineann an fhadhb seo le:

Is é a chaithfidh mé a fháil amach:



Focail Mata

+

-

An
tsuim.



Meastachán
s'agamsa



- Níos mó ná 5
- Níos lú ná 5

Bain triail as

Bhí 7 eitleán  ag an aerfort.

Tháinig 2 eitleán  eile.

Cá mhéad ar fad atá ag an aerfort anois?

Baineann an fhadhb seo le:

Is é a chaithfidh mé a fháil amach:



Focail Mata

+ _____

- _____

An
tsuim.

Meastachán
s'agamsa

- Níos mó ná 5
- Níos lú ná 5

Bain triail as

Bhí 8 gasúr ag imirt peile



D'imigh 5 acu

Cá mhéad gasúr atá fágtha?

Baineann an fhadhb seo le:

Is é a chaithfidh mé a fháil amach:



Focail Mata

+

-

An
tsuim.



Meastachán
s'agamsa

- Níos mó ná 5
- Níos lú ná 5

Bain triail as

Bhí 4 dineasár  sa pháirc.

Tháinig 3 dhineasár  eile chuig an pháirc.

Cá mhéad san iomlán atá ann?

Baineann an fhadhb seo le:

Is é a chaithfidh mé a fháil amach:



Focail Mata

+ _____

- _____

An
tsuim.

Meastachán
s'agamsa

- Níos mó ná 5
- Níos lú ná 5

Bain triail as

Bhí 4 páiste  sa chlós.

Tháinig 2 eile isteach.

Cá mhéad páiste  ar fad atá sa chlós anois?

Baineann an fhadhb seo le:

Is é a chaithfidh mé a fháil amach:

•

•

•

•

Focail Mata

+



-

An
tsuim.

Meastachán
s'agamsa

- Níos mó ná 5
- Níos lú ná 5

Réitigh é


Bhí 9 dineasár  sa pháirc. D'imigh 3 cinn acu.
Cá mhéad dineasár  atá fágtha?

Focail Mata

+ _____

- _____

Caithfidh mé _____ + _____ a dhéanamh.
- _____



An
tsuim

Réitigh é

Thug Liam 6 mhilseán  dom.

Thug Nóra 3 cinn eile dom.

Cá mhéad milseán  ar fad atá agam anois?

Focail Mata

+ _____


- _____

Caithfidh mé

+

a dhéanamh.

-



An
tsuim

A large empty rectangular box for writing the answer.

Réitigh é

Chonaic Liam 3 dhamhán alla .

Ansin chonaic sé 2 cheann eile.

Cá mhán alla ar fad a chonaic sé?

Focail Mata

+ _____


- _____

Caithfidh mé

+

a dhéanamh.

-



An
tsuim

Réitigh é

Tá 6 iasc ag Liam sa tanc s'aige.

D'ith cat mór 4 cinn acu.

Cá mhá fágtha?


Focail Mata

+ _____

- _____

Caithfidh mé _____ + _____ a dhéanamh.

-



An
tsuim

Réitigh é

Bhí 5 cheapaire  agam do mo lón.

D'ith mé 2 cheapaire.

Cá mhéad cheapaire atá fágtha agam?

Focail Mata

+ _____


- _____

Caithfidh mé

+

a dhéanamh.

-



An
tsuim

A large empty rectangular box for writing the answer.

Réitigh é

Bhí 8 páiste  ar bhus dearg.

Nuair a stop an bus thuirling 3 acu.

Cá mhéad páiste a bhí fágtha ar an bhus dearg?

Focail Mata

+ _____


- _____

Caithfidh mé

+

a dhéanamh.

-



An
tsuim


A large empty rectangular box for writing the answer to the problem.

Zúm

Cuspóir Cleachtadh a thabhairt do na páistí ag déanamh a suimeanna i bhfoirm focal féin.

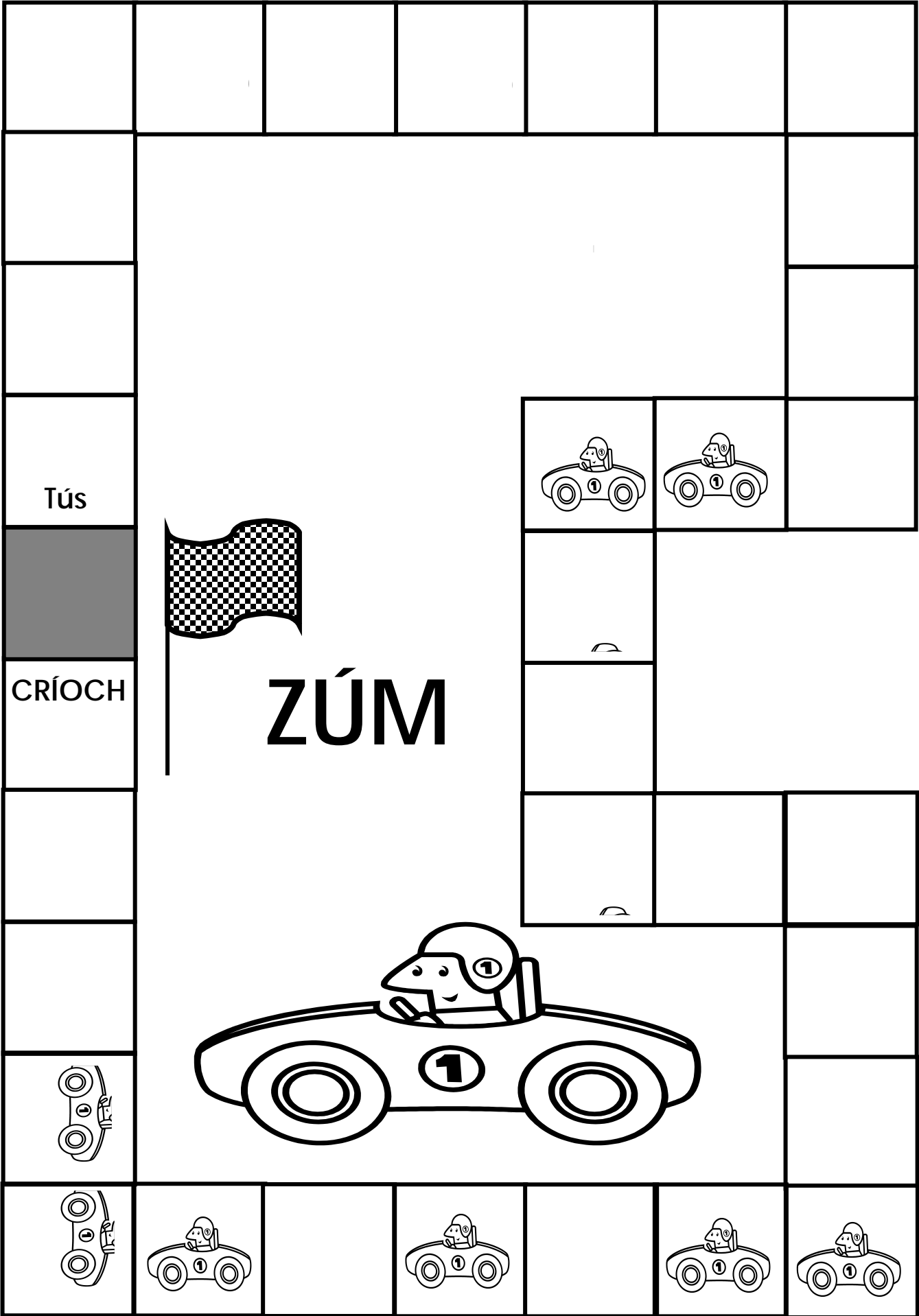
Líon na n-imreoirí 2 – 4 imreoirí

Ábhair Dísle le 6 aghaidh
Clár Imeartha (A3)
Cnaipí daite
Tacar cártaí



RIALACHA



1. Suaith na cártaí agus cuir iad béal faoi ar an tábla.
2. Tosaíonn an chéad duine a rollann 6 ar an dísle.
3. Nuair a thiteann cnaipe duine ar chearnóg le carr air tógann sé/sí cárta.
4. Léigh an cárta agus déan suim i bhfoirm focal. (Tig an liosta focal a úsáid chun cuidiú le léamh).
5. Má tá ciall leis an tsuim i bhfoirm focal (na himreoirí eile a dhéanann cinneadh), tá cead ag an imreoir an cnaipe a bhogadh de dréir mar a threoraíonn an cárta.
6. Glacann an chéad duine eile an dísle agus déanann sé/sí amhlaidh.
7. Is é an buaiteoir an duine a bhaineann CRÍOCH amach ar dtús (nó 3 rádal, nó 5 rádal nómar sin).



Tús

CRÍOCH

ZÚM




Déan do shuim i bhfocail féin.



Chun tosaigh 4

Déan do shuim i bhfocail féin.



Chun tosaigh 4

Déan do shuim i bhfocail féin.



Chun tosaigh 4


Stop

Tá peitreal de dhíth.

Cail

do

Seal




Stop

Athraigh na boinn

Cail

do

Sheal




Stop

Fadhb leis an inneall.

Cail

do

Sheal



7 - 3

chun tosaigh 3

10 - 6

chun tosaigh 3

8 + 1

chun tosaigh 3

3 + 5

chun tosaigh 3

7 + 3

chun tosaigh 3

6 - 6

chun tosaigh 3

D'ith sé 3 cheapaire. chun tosaigh 2	Sheol 5 bhád ar shiúl. chun tosaigh 2
D'ith an cat mór 4 iasc. chun tosaigh 2	Cá mhéad nathair ar fad? chun tosaigh 2
D'eitil 7 éan ar shiúl. chun tosaigh 2	Tá 9 bóin Dé agam. chun tosaigh 2
Cheannaigh Nóra 8 líreacán. chun tosaigh 2	10 páiste ar an bhus dearg. chun tosaigh 2
Bhí 5 dhamhán alla sa teach. chun tosaigh 2	Bhí 4 liathróid ag Liam. chun tosaigh 2
Bhí 9 leabhar ag Liam. chun tosaigh 2	Cá mhéad atá fágtha? chun tosaigh 2

8 éan.

chun tosaigh 2

Rith 8 dineasár ar shiúl.

chun tosaigh 2

D'eitil 7 roicéad ar shiúl.

chun tosaigh 2

Má tá 9 bonnóg ar an phláta.

chun tosaigh 2

Cá mhéad ar fad?

chun tosaigh 2

Cá mhéad atá fágtha?

chun tosaigh 2

Tá 1 peann luaidhe ah Nóra.

chun tosaigh 2

Cá mhéad san iomlán?

chun tosaigh 2

7 páiste ag an bus stop.

chun tosaigh 2

D'ith Liam 7 gceapaire.

chun tosaigh 2

Cá mhéad atá fágtha?

chun tosaigh 2

Cá mhéad dineasár san iomlán?

chun tosaigh 2

Cá mhéad iasc ar fad?

chun tosaigh 2

Fuair Liam 2 choinín eile.

chun tosaigh 2

Tá 6 dineasár ag Liam.

chun tosaigh 2

Bhí 5 fhéileacán sa ghairdín.

chun tosaigh 2

Bhí 9 milseán ag Nóra.

chun tosaigh 2

D'eitil 6 eitleán ar shiúl.

chun tosaigh 2


Cá mhéad atá fágtha?

chun tosaigh 2


Bhí 3 bhéar agus 8 nathair sa zú.

chun tosaigh 2


Déan Suim i bhFoirm Focal



1



2



3

Cuir in ord.

1
2
3

Gearr agus greamaigh.

Tarraing é

Gearr agus greamaigh.

Cuir in ord.

1
2
3


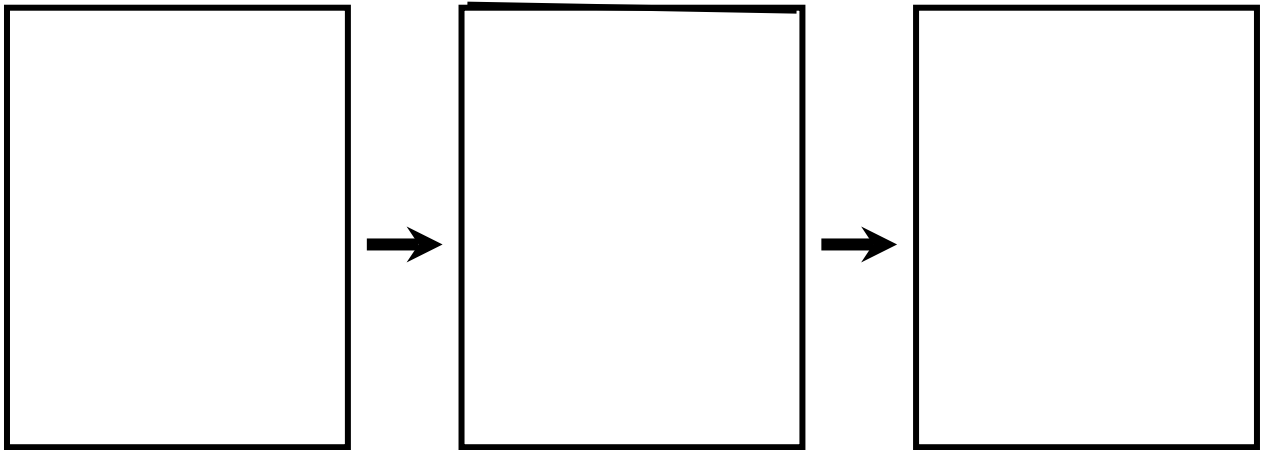
Tarraing pictiúir don áireamh seo.

--

--

--


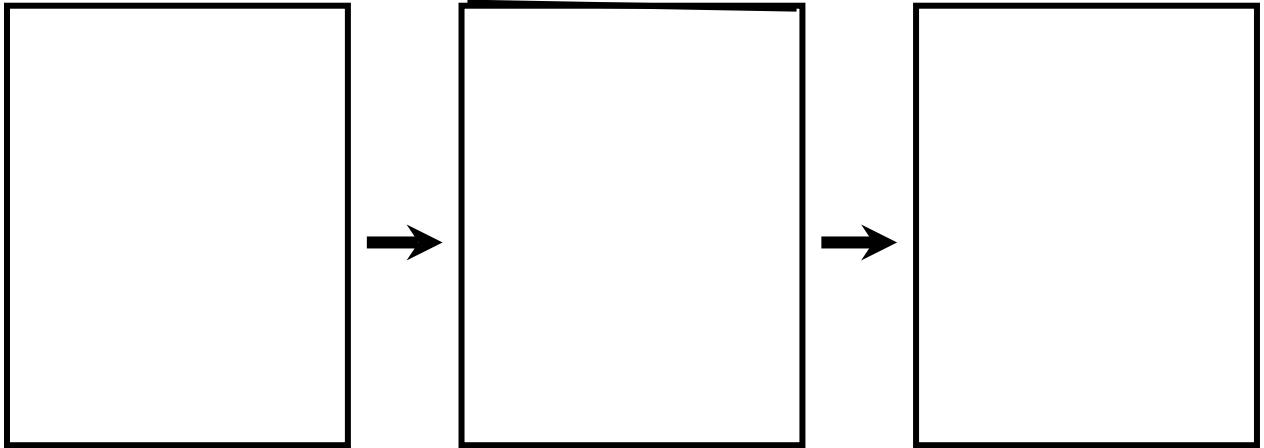
Gearr agus Greamaigh



Banc Focal



A large empty rectangular box with the text "Banc Focal" (Focus Bank) written in the top-left corner.

Scríobh é



Tarraing agus scríobh é

Tarraing pictiúir don suim seo.



Scríobh suim i bhfoirm focal don tsuim seo.
Bain úsáid as an liosta focal agus na focail
mata.



Bain triail as

Baineann an fhadhb seo le:

Is é a chaithfidh mé a fháil amach:

•

•

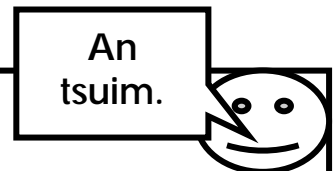
Focail Mata

+

-



- Níos mó ná 5
- Níos lú ná 5



Réitigh é

Focail Mata

+ _____

- _____

Caithfidh mé _____ + _____ a dhéanamh.
- _____

